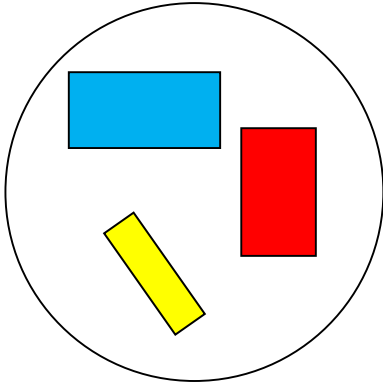


Sort 2D Shapes

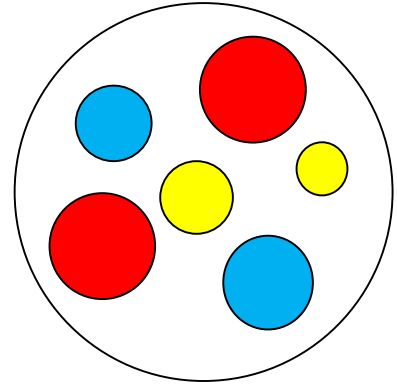
4. Label the groups from the options below.



rectangles

squares

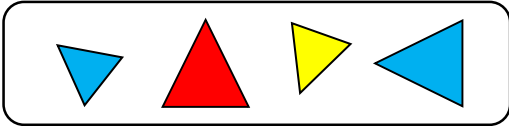
circles



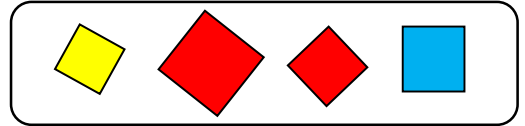
VF
HW/Ext

5. Match the groups of shapes that are the same.

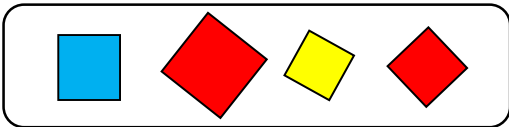
A.



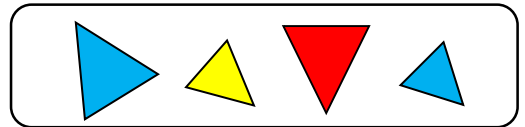
1.



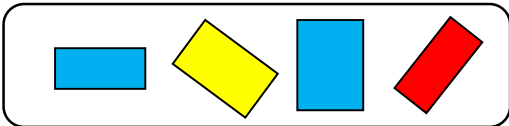
B.



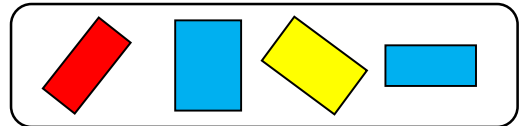
2.



C.



3.



VF
HW/Ext

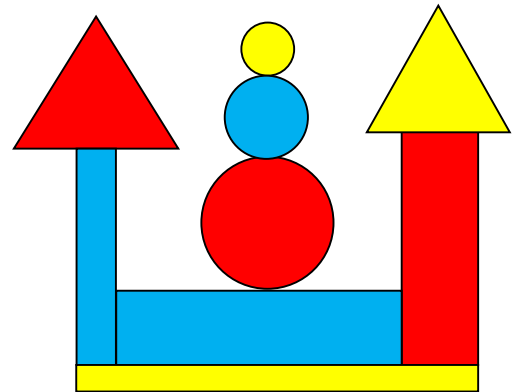
6. Complete the statements with the correct 2D shape.

A. There are 4...

B. There are 2...

C. There are 3...

D. There are no...



RPS
HW/Ext