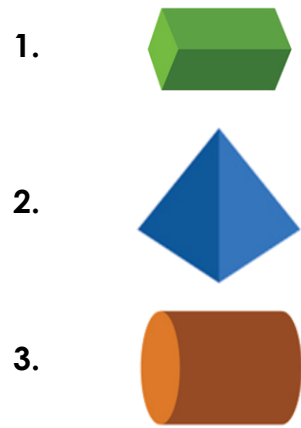
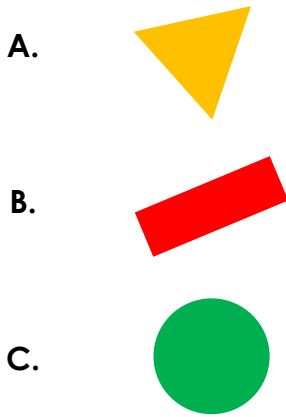


# 2D Shapes

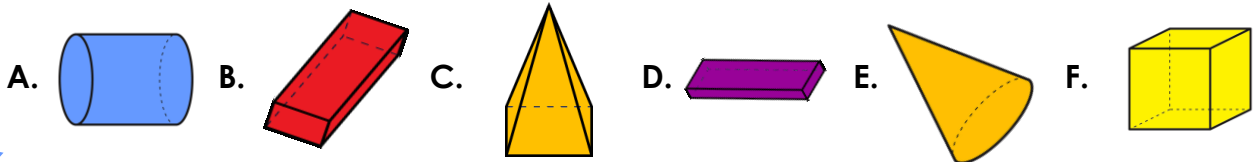
4. Match the 2D shapes to the 3D shape with the same surface.



VF  
HW/Ext

5. Sort the 3D shapes by their surface shape into the table below.

Square	Circle	Rectangle



VF  
HW/Ext

6. Lara is looking at the 3D shape below.

She says,



On my 3D shape, I can see a rectangle and a square.



Do you agree? Explain your answer.



RPS  
HW/Ext