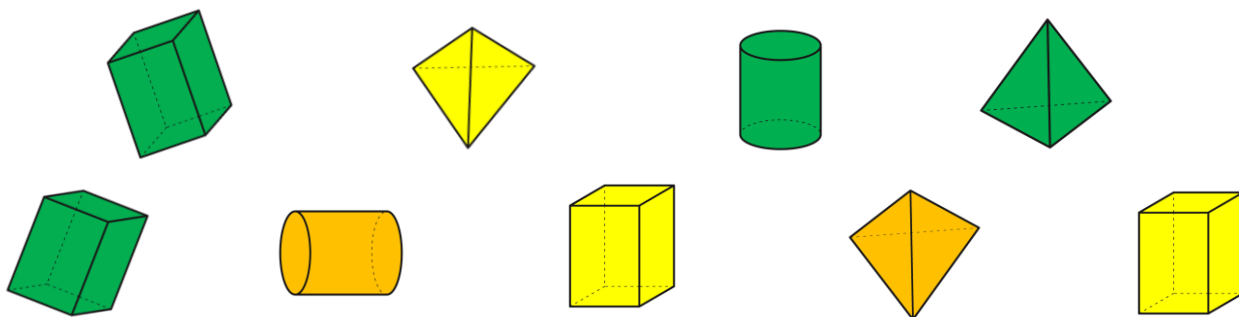


3D Shapes

4. Jacob is counting the shapes. How many of each shape does he have?



cuboids

triangular-based
pyramids

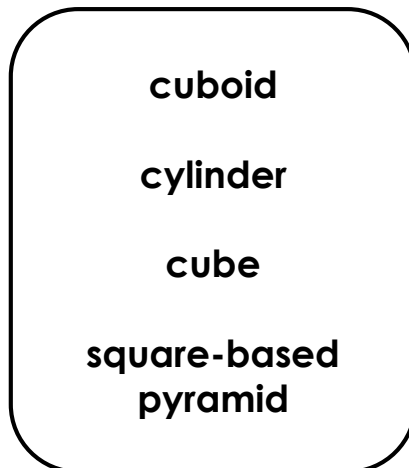
cylinders



VF
HW/Ext

5. Complete the table by naming the 3D shapes. Use the word bank to help you.

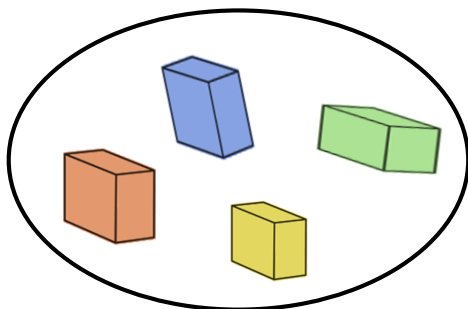
1.		
2.		
3.		
4.		




VF
HW/Ext

6. Jade has sorted the 3D shapes into two groups.

cylinders



cuboids



Jade

Is she correct? Convince me!



RPS
HW/Ext