

# Home Learning Pack

## Year 1

Name: \_\_\_\_\_

Colour the box when you have completed the challenge!

## LIFE SKILLS BINGO

Make a sandwich	Bake some cakes	Make your bed	Lay the table for dinner	Practice wrapping up gifts in paper
Help with the washing up/ stack the dishwasher	Clear the table	Get dressed independently	Tidy a cupboard/drawer	Price comparison searching for groceries online
Peel vegetables	Help with the dusting	Help pull the weeds in the garden	Vacuuming	Learn how to tie shoelaces
Tidy up your toys	Help to feed your pets	Help to wash the car	Fold the laundry	

## GENERAL LEARNING SKILLS BINGO

Create and fly a kite	Make a paper boat	Write a letter / email to a relative	Hide something and make a treasure map	Record sounds and ask others to guess what they are
Make a puppet from your favourite book	Create a board game	Learn a poem/song off by heart	Create a shop where you buy/get change	Create a detailed self-portrait using a mirror

# One more, one less

Find one more and one less than the given numbers.

a

	- 1
42	
	+ 1

b

	- 1
39	
	+ 1

c

	- 1
30	
	+ 1

d

	- 1
27	
	+ 1

e

	- 1
49	
	+ 1

f

	- 1
35	
	+ 1

Complete the tables by selecting numbers below 50.

Find one more and one less than the number. The first one has been done for you.

1 less	Number	1 more
33	34	35

1 less	Number	1 more

1. Colour the pictures.
2. Choose something small like a paper clip or blob of blue tac to drop.


3. Close your eyes and drop the item on the picture
4. Tell a story to a grown up using that picture.
5. Now you've practised it, can you write it down?
6. **EXTRA CHALLENGE** – in your story can you use 'and' and a '?' – Good Luck!



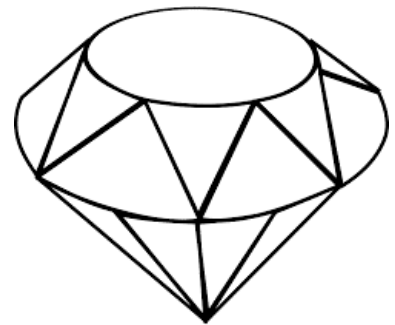
school



friends



magic




gem

gem



book




astronaut

Can you find these digraphs in your books at home?

Write as many words as you can find in the table!

er	
aw	
wh	
ph	
ew	
oe	
ay	
ey	

# Snakes and Ladders



You will need...

- The Snakes and Ladders Board Game board
- A dice
- A counter per player


How to play...

1. Players take it in turns to roll the dice. The player with the highest number goes first, the person with the second highest goes second and so on.
2. The player moves the counter the number of spaces shown on the dice.
3. If a player lands on a snake's head, the player's counter slides down to the square at the snake's tail.
4. If a player lands on the bottom of a ladder, the player's counter climbs up to the square at the top of the ladder.
5. The first player to reach the finish is the winner.

$13+7=$ 21	$4+16=$ 22	$9+11=$ 23	$13+7=$ 24	Finish 25
$3+17=$ 20	$2+18=$ 19	$4+16=$ 18	$12+8=$ 17	$3+17=$ 16
$10+10=$ 11	$5+15=$ 12	$3+17=$ 13	$1+19=$ 14	$4+16=$ 15
$1+19=$ 10	$2+18=$ 9	$3+17=$ 8	$11+9=$ 7	$8+12=$ 6
Start 1	$20+0=$ 2	$14+6=$ 3	$18+2=$ 4	$7+13=$ 5

## Tens and ones

Complete the tens and ones grids. The first one has been completed for you.

24	2 tens 4 ones	
----	------------------	---

32		
----	--	--

50		
----	--	--

17		
----	--	--

36		
----	--	--


41		
----	--	--

19		
----	--	--

33		
----	--	--

	3 tens 9 ones	
--	------------------	--

		
--	--	---

		
--	--	---

	1 ten 4 ones	
--	-----------------	--

	2 tens 8 ones	
--	------------------	--

		
--	--	---

Now choose your own two-digit number and carry on in the Maths book we sent home!

Remember to keep practising those spellings –  
you could always try the challenge of making  
up a story **using EVERY word!**

**w/b 23/3/20**

Year 1 Spelling: **‘y’** and **‘i’** making the **‘igh’** sound.

Words that follow these patterns:

my	sky	why	reply
kind	find	idea	pilot

**How to remember this spelling pattern:**

Children have learned ‘igh’, ‘ie’ and ‘i-e’, they now they need to know that some words  
use ‘y’ or ‘i’ to make the same sound.

Please make sure your child knows the meaning of each word.

**Why not try playing...**

How many can you write in a minute!?

Indoor Fine Motor Skills Challenge Cards

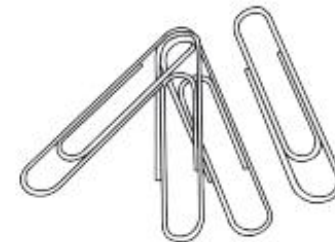
**How many buttons can  
you fasten?**



**up for spelling  
with these  
fine motor challenges!**

Indoor Fine Motor Skills Challenge Cards

**How many paper clips can  
you join together?**


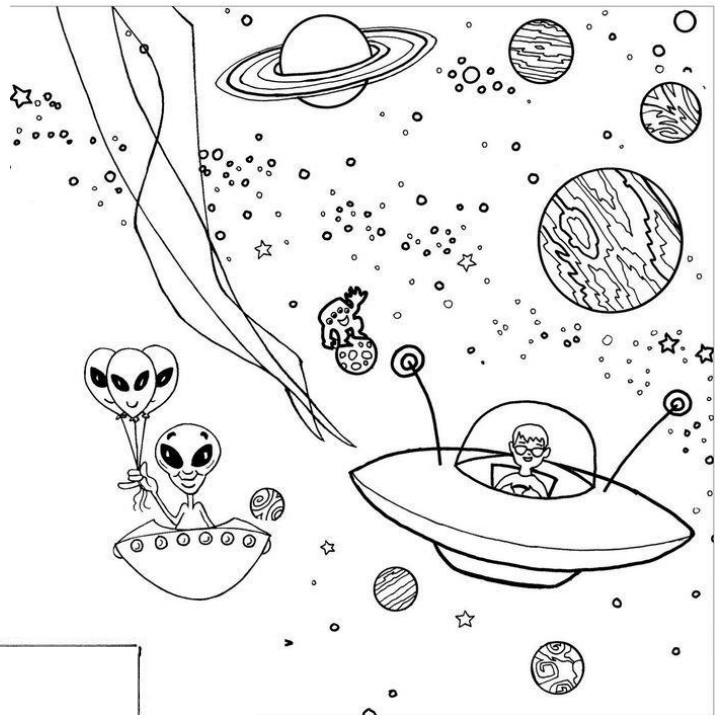






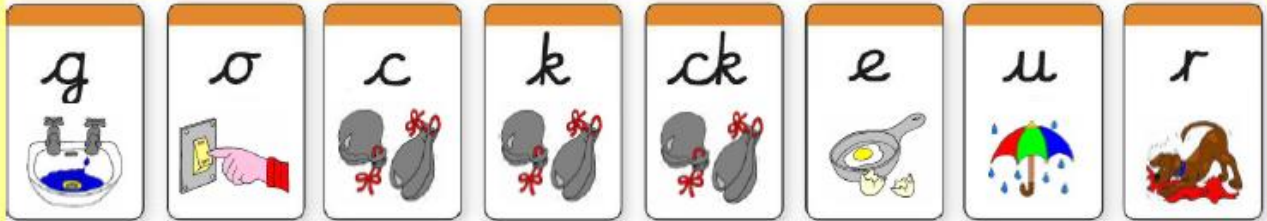

## Super story settings!

Choose a story setting to colour in and then write about it in the exercise book we sent home.

Remember to act it out and practice it with Talk 4 Writing actions first! You could even create a story map!




Use these sound mats to help you with your spelling ☺

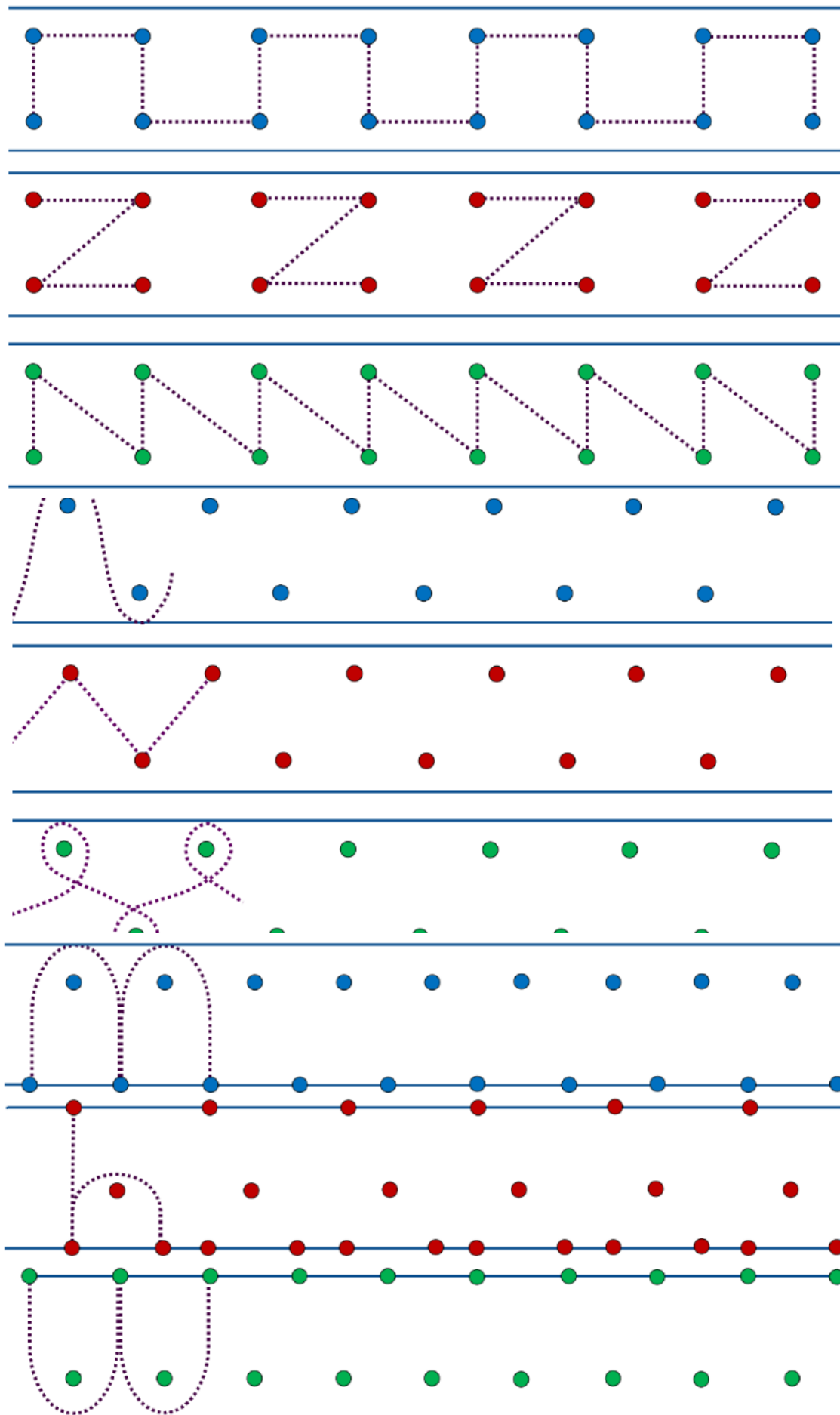


## My Sound Families

My **c** sound familyMy **ch** sound familyMy **f** sound familyMy **j** sound familyMy **m** sound familyMy **n** sound familyMy **ng** sound familyMy **r** sound familyMy **s** sound familyMy **sh** sound familyMy **v** sound familyMy **w** sound familyMy **e** sound familyMy **i** sound familyMy **o** sound familyMy **u** sound family

## My Sound Families

My **ai** sound familyMy **ee** sound familyMy **igh** sound familyMy **oa** sound familyMy **(y)oo** sound familyMy **oo** sound familyMy **ou** sound familyMy **or** sound familyMy **ar** sound familyMy **er** sound familyMy **ear** sound familyMy **air** sound familyMy **oi** sound familyMy **ou** sound familyMy **iz** sound family



\*

Can you have a go at creating your own?

\* No laughing, adults



# Phonics Activity Mat 1

Read these words to a friend.

hoff



chin

plig



sheep

frung



leap

phote



spray

landpot



chatter

Write the real words next to the chest and the nonsense words next to the bin.

lith

haunt

moin

dush

fight

chomp

wess

blank



Circle all of the words that contain the **ee** digraph.

free

night

hard

street

fair

meet

coins

speak

Add the sound buttons to these words.

clouds

thing

spears

Write the missing sounds in these words.



fo\_\_



\_\_een



\_\_ink



b\_\_ger



spr\_\_t



cr\_\_on



b\_\_d



l\_\_k\_\_



h\_\_m\_\_



ph\_\_n\_\_

Write a word that contains **ure**.

\_\_\_\_\_

# Year 1 Spring Term 1 SPaG Mat

5

Tick where 'and' should go in the sentence.

a



I have ham eggs.



Add ? or ! to complete this sentence.

c



This is hard

Add the prefix 'un' to this word to change the verb to its opposite.

e

dress \_\_\_\_\_



Circle the words you think should have a capital letter.

b

spain


sun

monday



Which tricky word has Mr Whoops been juggling with?

d



Practise writing these tricky word spellings.

f

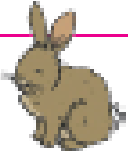






like \_\_\_\_\_









some \_\_\_\_\_

come \_\_\_\_\_

# Counting in 5s Mazes

Help the rabbit find the path through the maze to the carrots by counting on in fives from zero.

	0	5	10	20	45	5	10
	30		15		15		25
40	10	50	20	25	30	5	15
	15		35		35	40	

	10	15		20	45	5	10
0		50	10	5		30	
5	25	50	25	30	35	50	0
10	15		35	40	45	50	45
5	20	25	30		40		30

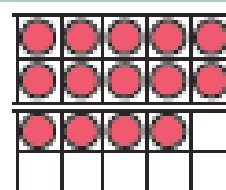
## Challenge

Complete this sequence.





0    5        15    20        30        40    45

# Number Representations to 20

Draw circles in the ten-frames to represent the number on the egg baskets. Write the number in words. The first one has been done for you.



fourteen





# Addition and Subtraction to 20

## Spring Mosaic

Solve the calculations to reveal the hidden picture. Each answer has a special colour.

yellow = 0 to 8

green = 9 to 15

red = 16 to 20

			$10 + 6$			
			$18 - 2$			
	$19 - 3$	$12 + 5$	$10 - 5$	$9 + 9$	$19 - 2$	
	$10 + 10$	$17 - 1$	$4 + 4$	$18 - 1$	$9 + 8$	
			$8 + 8$			
			$20 - 1$			
			$15 - 1$			
	$9 + 4$		$8 + 3$		$13 - 3$	
		$14 - 4$	$12 - 2$	$7 + 3$		
			$1 + 10$			

### Challenge

The flower has 4 petals. 2 fall off. How many petals are left? Write this problem as a calculation.